

1. The curve with equation $y = f(x)$ where

$$f(x) = x^2 + \ln(2x^2 - 4x + 5)$$

has a single turning point at $x = \alpha$

(a) Show that α is a solution of the equation

$$2x^3 - 4x^2 + 7x - 2 = 0 \quad (4)$$

The iterative formula

$$x_{n+1} = \frac{1}{7}(2 + 4x_n^2 - 2x_n^3)$$

is used to find an approximate value for α .

Starting with $x_1 = 0.3$

(b) calculate, giving each answer to 4 decimal places,

(i) the value of x_2

(ii) the value of x_4

(3)

Using a suitable interval and a suitable function that should be stated,

(c) show that α is 0.341 to 3 decimal places.

(2)

$$a) \quad f(x) = x^2 + \ln(2x^2 - 4x + 5)$$

$$f'(x) = 2x + \frac{4x - 4}{2x^2 - 4x + 5} \quad (2)$$

turning point has $f'(x) = 0$

$$2x + \frac{4x - 4}{2x^2 - 4x + 5} = 0$$

$$\downarrow \quad \times (2x^2 - 4x + 5)$$

$$2x(2x^2 - 4x + 5) + 4x - 4 = 0 \quad (1)$$

$$4x^3 - 8x^2 + 14x - 4 = 0$$

$$2x^3 - 4x^2 + 7x - 2 = 0 \quad (1)$$

$$b) x_{n+1} = \frac{1}{7}(2 + 4x_n^2 - 2x_n^3)$$

$$x_1 = 0.3$$

$$x_2 = \frac{1}{7}(2 + 4(0.3)^2 - 2(0.3)^3) \quad \textcircled{1}$$

$$(i) x_2 = 0.329428\dots \\ = 0.3294 \text{ (4dp)} \quad \textcircled{1}$$

$$(ii) x_4 = 0.339823\dots \\ = 0.3398 \text{ (4dp)} \quad \textcircled{1}$$

$$c) \text{ let } h(x) = 2x^3 - 4x^2 + 7x - 2$$

$h(x) = 0$ represents a turning point of $f(x)$.
Want to show that $\alpha = 0.341$ to 3dp.

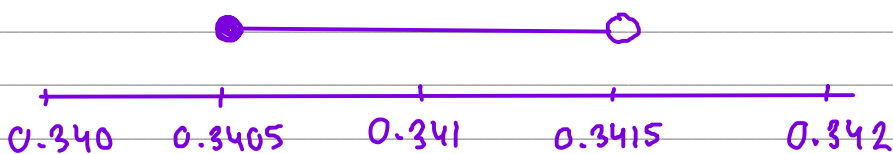
$$h(0.3415) = 0.00366\dots > 0$$

$$h(0.3405) = -0.00130\dots < 0 \quad \textcircled{1}$$

- since there is a change in sign

- and $f'(x)$ is a continuous function

- $\alpha = 0.341$ to 3dp $\textcircled{1}$



2. A curve has equation $y = f(x)$, where

$$f(x) = \frac{7xe^x}{\sqrt{e^{3x} - 2}} \quad x > \ln \sqrt[3]{2}$$

(a) Show that

$$f'(x) = \frac{7e^x(e^{3x}(2-x) + Ax + B)}{2(e^{3x} - 2)^{\frac{3}{2}}}$$

where A and B are constants to be found.

(5)

(b) Hence show that the x coordinates of the turning points of the curve are solutions of the equation

$$x = \frac{2e^{3x} - 4}{e^{3x} + 4}$$

(2)

The equation $x = \frac{2e^{3x} - 4}{e^{3x} + 4}$ has two positive roots α and β where $\beta > \alpha$

A student uses the iteration formula

$$x_{n+1} = \frac{2e^{3x_n} - 4}{e^{3x_n} + 4}$$

in an attempt to find approximations for α and β

Diagram 1 shows a plot of part of the curve with equation $y = \frac{2e^{3x} - 4}{e^{3x} + 4}$ and part of the line with equation $y = x$

Using Diagram 1 on page 42

(c) draw a staircase diagram to show that the iteration formula starting with $x_1 = 1$ can be used to find an approximation for β

(1)

Use the iteration formula with $x_1 = 1$, to find, to 3 decimal places,

(d) (i) the value of x_2

(ii) the value of β

(3)

Using a suitable interval and a suitable function that should be stated

(e) show that $\alpha = 0.432$ to 3 decimal places.

(2)

$$a) f(x) = \frac{7xe^x}{(e^{3x}-2)^{1/2}}$$

$$\frac{d}{dx}(7xe^x): \text{ let } u=7x \quad v=e^x$$

$$\frac{du}{dx} = 7 \quad \frac{dv}{dx} = e^x$$

$$\frac{du}{dx}v + \frac{dv}{dx}u = 7e^x + 7xe^x$$

$$\begin{aligned} \frac{d}{dx}((e^{3x}-2)^{1/2}) &= \frac{1}{2} \times 3e^{3x} \times (e^{3x}-2)^{-1/2} \\ &= \frac{3}{2}e^{3x}(e^{3x}-2)^{-1/2} \end{aligned}$$

$$f(x) = \frac{7xe^x}{(e^{3x}-2)^{1/2}}$$

using quotient rule

$$f'(x) = \frac{(e^{3x}-2)^{1/2}(7e^x+7xe^x) - 7xe^x\left(\frac{3}{2}e^{3x}(e^{3x}-2)^{-1/2}\right)}{e^{3x}-2}$$

$$= \frac{7(e^{3x}-2)^{-1/2} \left[e^x(e^{3x}-2)(1+x) - \frac{3}{2}xe^xe^{3x} \right]}{e^{3x}-2}$$

$$= \frac{7e^x \left[(e^{3x}-2)(1+x) - \frac{3}{2}xe^{3x} \right]}{e^{3x}-2}$$

factoring out $7(e^{3x}-2)^{-1/2}$

moving $(e^{3x}-2)^{-1/2}$ to the denominator $\rightarrow (e^{3x}-2)^{3/2}$

factoring out e^x

Only use the copy of Diagram 1 if you need to redraw your answer to part (c).

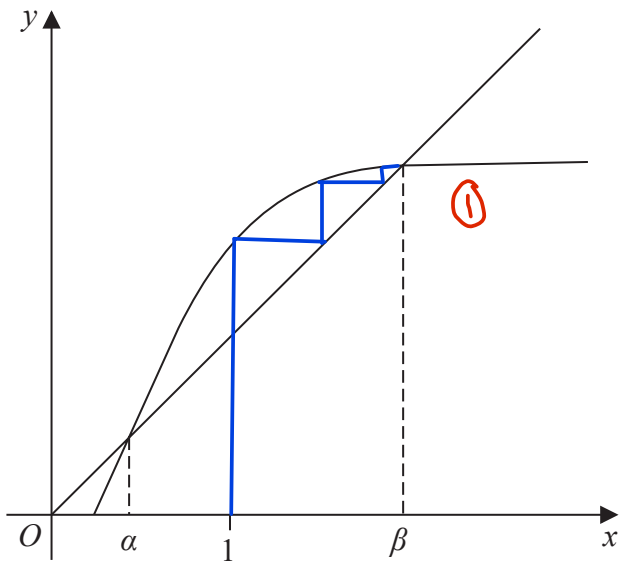
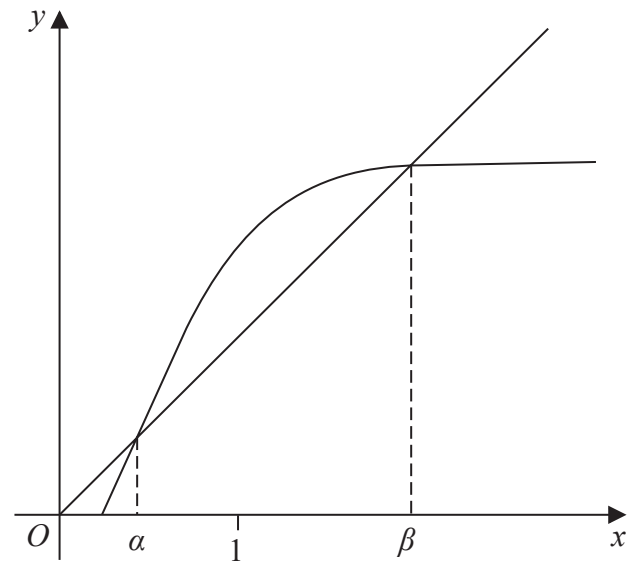


Diagram 1



copy of Diagram 1

$$f'(x) = \frac{7e^x \left[e^{3x} + xe^{3x} - 2 - 2x - \frac{3}{2}xe^{3x} \right]}{(e^{3x} - 2)^{3/2}}$$

expanding bracket

$$= \frac{7e^x \left[e^{3x} - \frac{1}{2}xe^{3x} - 2x - 2 \right]}{(e^{3x} - 2)^{3/2}}$$

collecting like terms

$$= \frac{7e^x (2e^{3x} - xe^{3x} - 4x - 4)}{2(e^{3x} - 2)^{3/2}}$$

multiplying top and bottom by 2

$$= \frac{7e^x (e^{3x}(2-x) - 4x - 4)}{2(e^{3x} - 2)^{3/2}}$$

as required.

b) turning points have $f'(x)=0$

$$\Rightarrow \frac{7e^x (e^{3x}(2-x) - 4x - 4)}{2(e^{3x}-2)^{3/2}} = 0$$

$e^x \neq 0$,
multiply by
 $2(e^{3x}-2)^{3/2}$

$$e^{3x}(2-x) - 4x - 4 = 0$$

$$2e^{3x} - xe^{3x} - 4x - 4 = 0$$

$$x(e^{3x} + 4) = 2e^{3x} - 4 \quad \textcircled{1}$$

$$x = \frac{2e^{3x} - 4}{e^{3x} + 4} \quad \textcircled{1}$$

c) drawn on diagram

$$d) x_{n+1} = \frac{2e^{3x_n} - 4}{e^{3x_n} + 4}$$

$$(i) x_2 = \frac{2e^3 - 4}{e^3 + 4} = 1.50177... \quad \textcircled{1}$$

$$= 1.502 \text{ (3dp)} \quad \textcircled{1}$$

$$(ii) \beta = 1.96757...$$

$$= 1.968 \text{ (3dp)} \quad \textcircled{1}$$

$$e) \alpha \text{ is a solution of } x = \frac{2e^{3x} - 4}{e^{3x} + 4}$$

$$\therefore \text{ a solution of } \frac{2e^{3x} - 4}{e^{3x} + 4} - x = 0$$

so define $h(x) = \frac{2e^{3x} - 4}{e^{3x} + 4} - x$, so $h(\alpha) = 0$.

$$h(0.4315) = -0.000297... < 0$$

$$h(0.4325) = 0.000947 > 0 \quad (1)$$

- since there is a change of sign
- and $h(x)$ is continuous
- $\alpha = 0.432$ (to 3dp) (1)